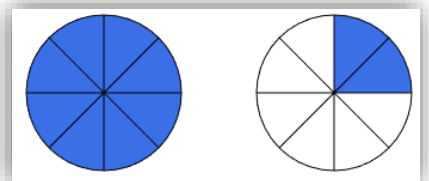
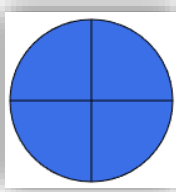
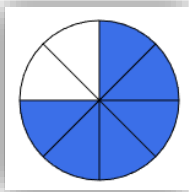
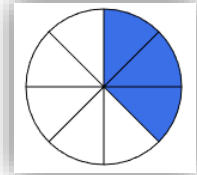
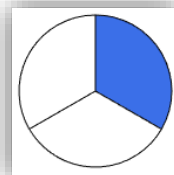
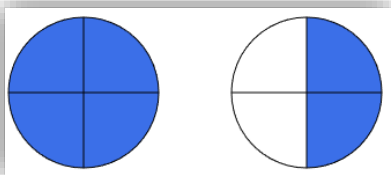
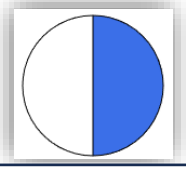
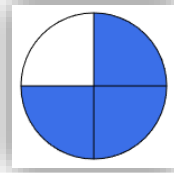
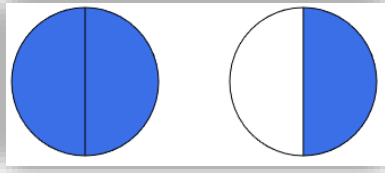
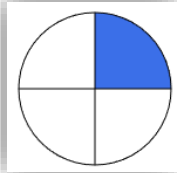


Nombres CE2

Recopie chaque écriture en-dessous de la bonne fraction.

un demi - trois huitièmes - quatre quarts - trois demis - un quart

trois quarts - six huitièmes - dix huitièmes - six quarts - un tiers



Redessine quelques fractions dans le cadre et écris ce que tu as dessiné. (comme l'exemple)


 $\frac{1}{4}$ un quart