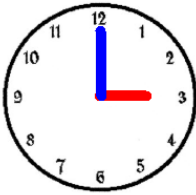
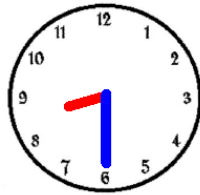


Mesures CE2

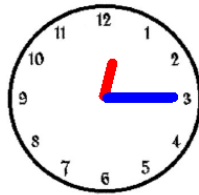
1. Écris l'heure qu'il est.



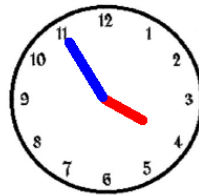
.....



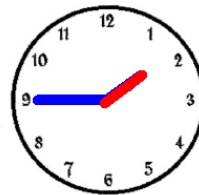
.....



.....



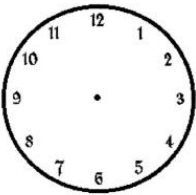
.....



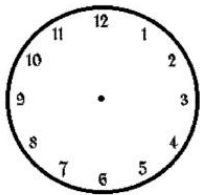
.....

Corrige ton travail en regardant ce qu'il fallait écrire (les réponses sont tout en bas de cette fiche* ; attention, je les ai mises dans le désordre !)

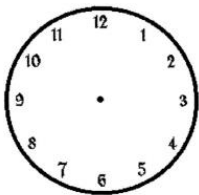
2. Dessine les aiguilles (heures : petite aiguille rouge ; minutes : grande aiguille bleue).



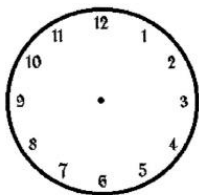
5h30



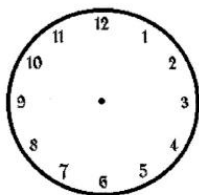
9h00



4h15



11h45

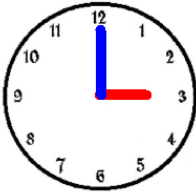


6h55

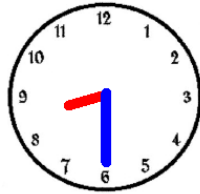
*8h30 3h55 1h45 3h00 12h15

Mesures CE2

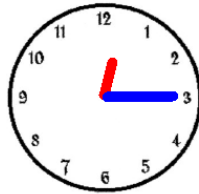
1. Écris l'heure qu'il est.



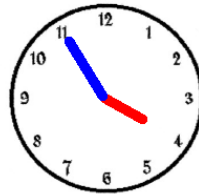
.....



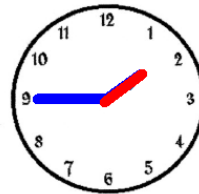
.....



.....



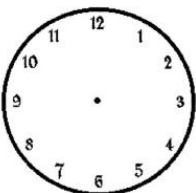
.....



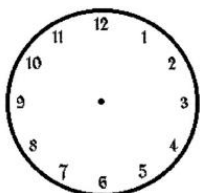
.....

Corrige ton travail en regardant ce qu'il fallait écrire (les réponses sont tout en bas de cette fiche* ; attention, je les ai mises dans le désordre !)

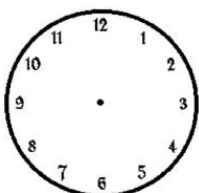
2. Dessine les aiguilles (heures : petite aiguille rouge ; minutes : grande aiguille bleue).



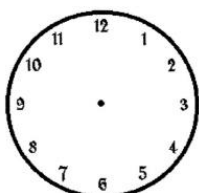
5h30



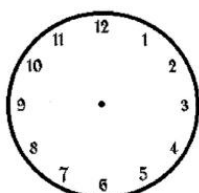
9h00



4h15



11h45



6h55

*8h30 3h55 1h45 3h00 12h15