

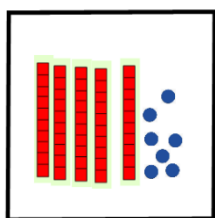
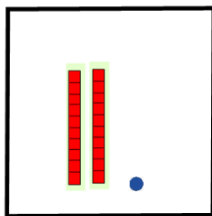


Dans cette fiche, les sommes doivent toujours faire 100.

Le problème, c'est qu'il manque des dizaines et des unités dans les carrés de droite. Dessine les  et les  qui manquent puis complète l'égalité.



+



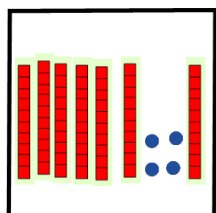
= 100

57

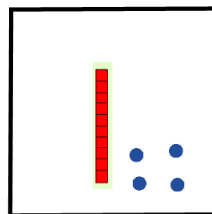
+

.....

= 100



+



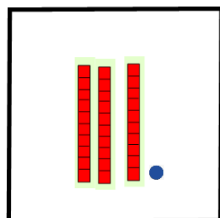
= 100

74

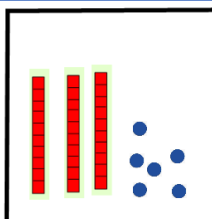
+

.....

= 100



+



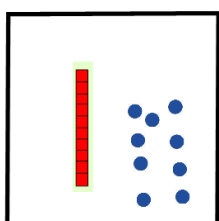
= 100

31

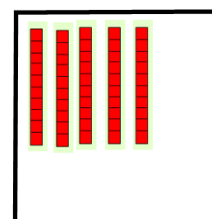
+

.....

= 100



+



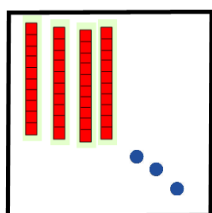
= 100

19

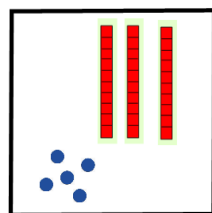
+

.....

= 100



+



= 100

43

+

.....

= 100