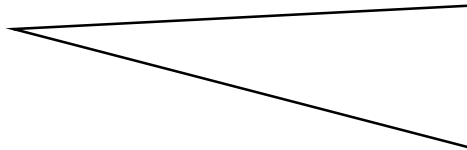
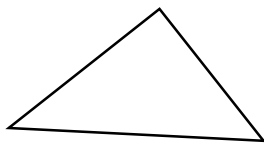
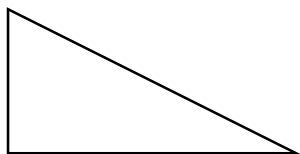


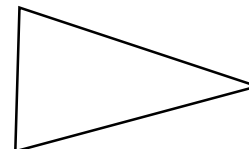
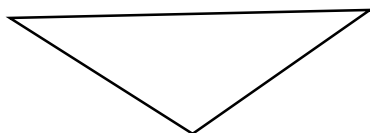
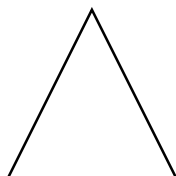
Géométrie : **les triangles**

Vérifie les angles de ces triangles avec ton équerre. **Marque** l'angle droit si tu en trouves.



♥ Si un triangle a, on l'appelle

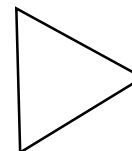
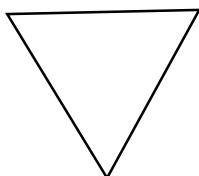
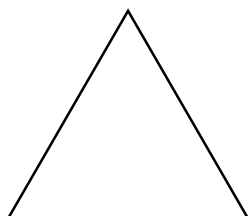
Mesure les côtés de ces triangles.



Que remarques-tu ?

♥ Si un triangle a, on l'appelle

Mesure les côtés de ces triangles.



Que remarques-tu ?

♥ Si un triangle a, on l'appelle