

Calcul CM1


**Combien manque-t-il pour aller à 100 ?**

Colorie en bleu les unités qui permettent de compléter la dizaine.

Colorie en rouge les dizaines qui permettent de compléter la centaine.


59 + ..... = 100

$$\begin{array}{r} 59 + \begin{array}{|c|} \hline \dots \\ \hline \end{array} = 60 \\ 60 + \begin{array}{|c|} \hline \dots \dots \\ \hline \end{array} = 100 \\ \hline \begin{array}{|c|} \hline \dots \dots \\ \hline \end{array} \end{array}$$




59 + ..... = 100

$$\begin{array}{r} 59 + \begin{array}{|c|} \hline \dots \\ \hline \end{array} = 60 \\ 60 + \begin{array}{|c|} \hline \dots \dots \\ \hline \end{array} = 100 \\ \hline \begin{array}{|c|} \hline \dots \dots \\ \hline \end{array} \end{array}$$




67 + ..... = 100

$$\begin{array}{r} 67 + \begin{array}{|c|} \hline \dots \\ \hline \end{array} = 70 \\ 70 + \begin{array}{|c|} \hline \dots \dots \\ \hline \end{array} = 100 \\ \hline \begin{array}{|c|} \hline \dots \dots \\ \hline \end{array} \end{array}$$



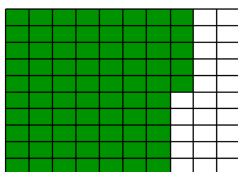
67 + ..... = 100

$$\begin{array}{r} 67 + \begin{array}{|c|} \hline \dots \\ \hline \end{array} = 70 \\ 70 + \begin{array}{|c|} \hline \dots \dots \\ \hline \end{array} = 100 \\ \hline \begin{array}{|c|} \hline \dots \dots \\ \hline \end{array} \end{array}$$




75 + ..... = 100

$$\begin{array}{r} 75 + \begin{array}{|c|} \hline \dots \\ \hline \end{array} = 80 \\ 80 + \begin{array}{|c|} \hline \dots \dots \\ \hline \end{array} = 100 \\ \hline \begin{array}{|c|} \hline \dots \dots \\ \hline \end{array} \end{array}$$



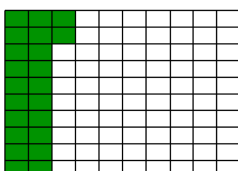
75 + ..... = 100

$$\begin{array}{r} 75 + \begin{array}{|c|} \hline \dots \\ \hline \end{array} = 80 \\ 80 + \begin{array}{|c|} \hline \dots \dots \\ \hline \end{array} = 100 \\ \hline \begin{array}{|c|} \hline \dots \dots \\ \hline \end{array} \end{array}$$




22 + ..... = 100

$$\begin{array}{r} 22 + \begin{array}{|c|} \hline \dots \\ \hline \end{array} = 30 \\ 30 + \begin{array}{|c|} \hline \dots \dots \\ \hline \end{array} = 100 \\ \hline \begin{array}{|c|} \hline \dots \dots \\ \hline \end{array} \end{array}$$




22 + ..... = 100

$$\begin{array}{r} 22 + \begin{array}{|c|} \hline \dots \\ \hline \end{array} = 30 \\ 30 + \begin{array}{|c|} \hline \dots \dots \\ \hline \end{array} = 100 \\ \hline \begin{array}{|c|} \hline \dots \dots \\ \hline \end{array} \end{array}$$



44 + ..... = 100

$$\begin{array}{r} 44 + \begin{array}{|c|} \hline \dots \\ \hline \end{array} = 50 \\ 50 + \begin{array}{|c|} \hline \dots \dots \\ \hline \end{array} = 100 \\ \hline \begin{array}{|c|} \hline \dots \dots \\ \hline \end{array} \end{array}$$



44 + ..... = 100

$$\begin{array}{r} 44 + \begin{array}{|c|} \hline \dots \\ \hline \end{array} = 50 \\ 50 + \begin{array}{|c|} \hline \dots \dots \\ \hline \end{array} = 100 \\ \hline \begin{array}{|c|} \hline \dots \dots \\ \hline \end{array} \end{array}$$

