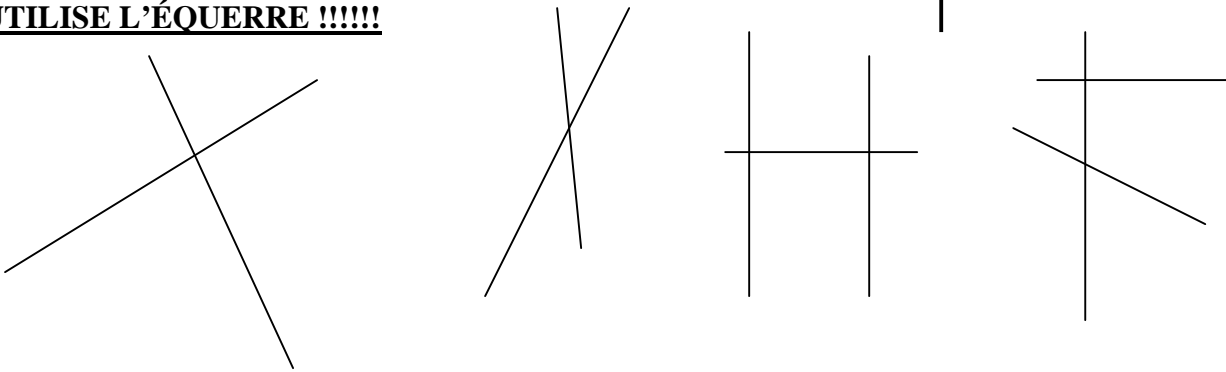
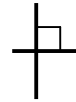


Prénom : .....

date : .....

1 - Sur ces figures, indique les angles droits avec le signe habituel. →

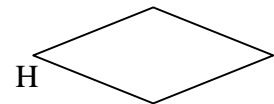
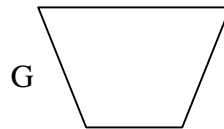
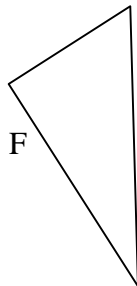
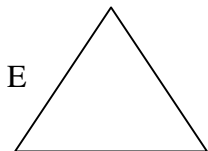
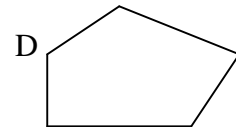
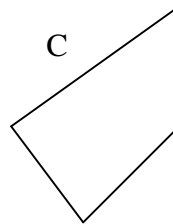

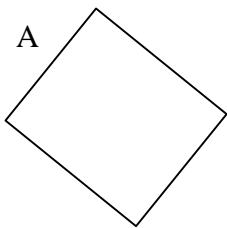
**UTILISE L'ÉQUERRE !!!!!**



2 - Trace en bleu 3 droites perpendiculaires à (d). (des droites **perpendiculaires** se croisent en **angle droit**)

(d)

3 - Complète le tableau.



Polygone	Nombre de côtés	Nombre de sommets	Nombre d'angles droits
A			
B			
C			
D			
E			
F			
G			
H			

Colorie en jaune les triangles, en vert les quadrilatères, en bleu le pentagone.